

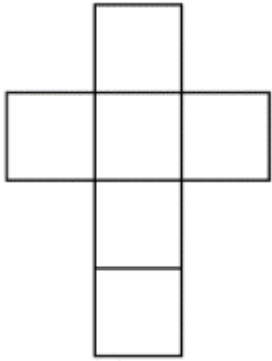
Датум: \_\_\_\_\_

Име и презиме: \_\_\_\_\_

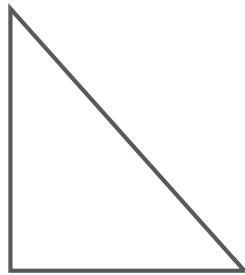
## 2Д и 3Д-ФОРМИ

Претставени се неколку шеми на фигури. Дали ги препознаваш?

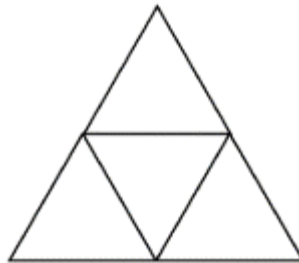
Под секоја од формите запиши и го името и од кој вид е (дали е 2Д или 3Д-форма).



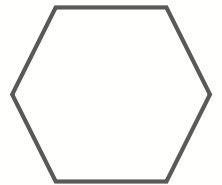
а) \_\_\_\_\_



б) \_\_\_\_\_



в) \_\_\_\_\_



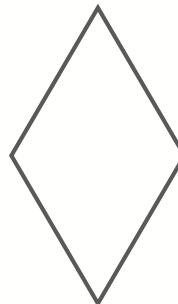
г) \_\_\_\_\_



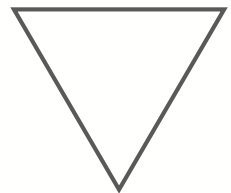
д) \_\_\_\_\_



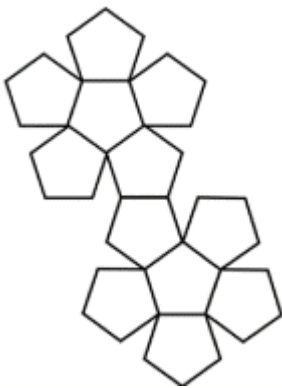
ѓ) \_\_\_\_\_



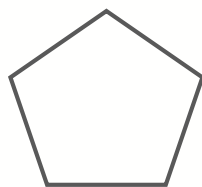
е) \_\_\_\_\_



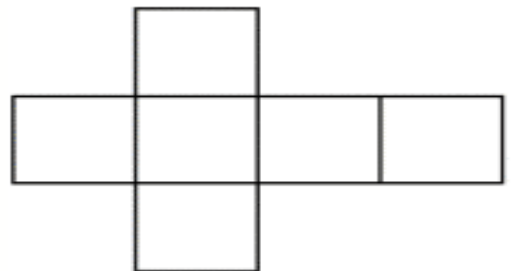
ж) \_\_\_\_\_



з) \_\_\_\_\_



с) \_\_\_\_\_



и) \_\_\_\_\_

Мислење на наставник: \_\_\_\_\_