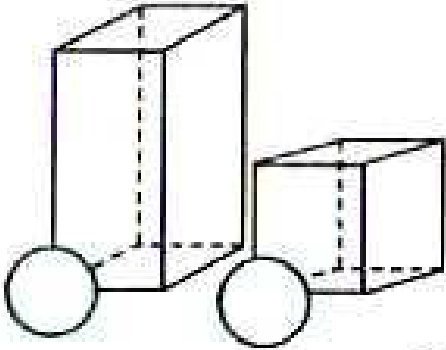




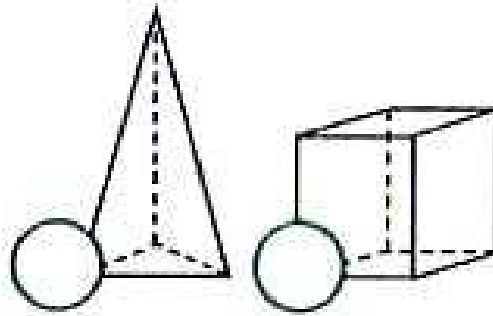
# Сидови, рабови и темиња

**1** Обој го кругчето што одговара на тврдењето .

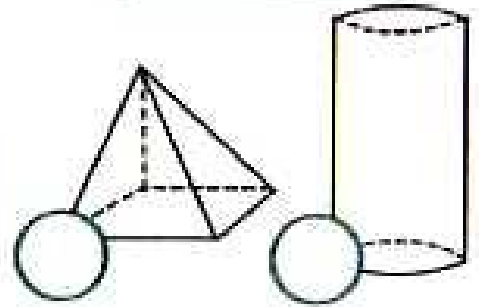
а) Имам 6 квадратни сидови.



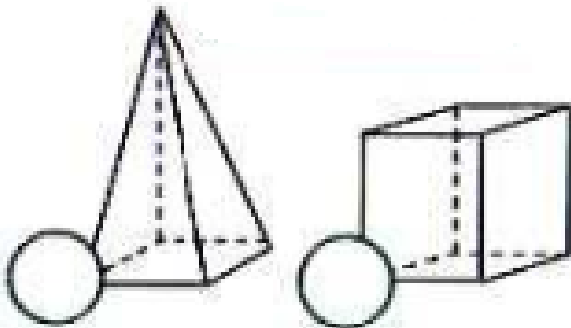
б) Имам 4 темиња



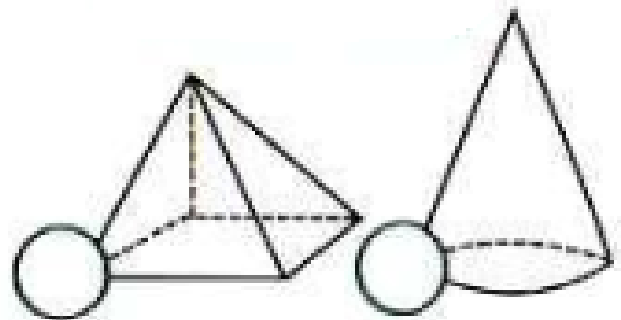
в) Имам заоблен сид



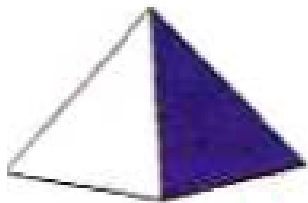
г) Имам 8 рабови.



д) Имам 1 теме.




**2** Запиши на која 2Д форма одговара обоените сидови од геометриското тело .




\_\_\_\_\_



\_\_\_\_\_



\_\_\_\_\_



\_\_\_\_\_

