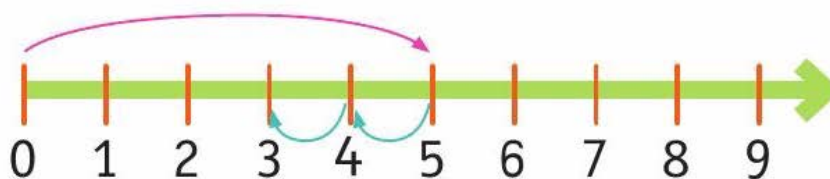


Име: _____

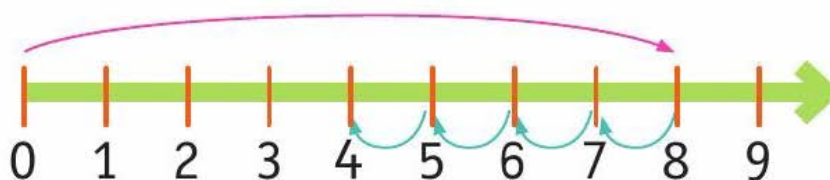


ОДЗЕМАЊЕ ЕДНОЦИФРЕНИ БРОЕВИ

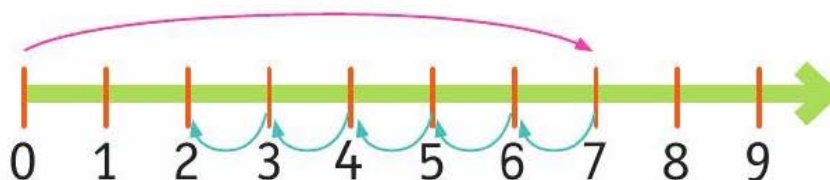
Пресметај ја разликата со помош на бројната оска.



$5 - 2 = \square$



$8 - 4 = \square$



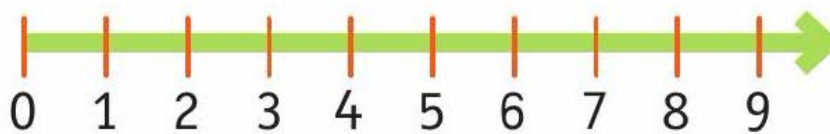
$\square - \square = \square$



$\square - \square = \square$



$6 - 5 = \square$



$8 - 1 = \square$