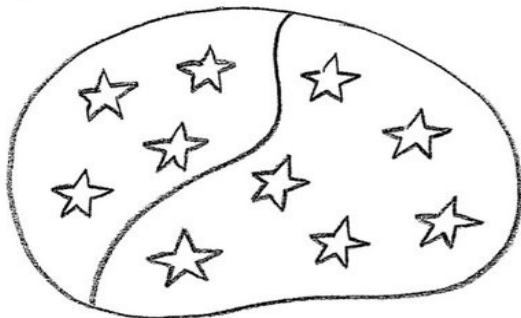


Име: _____

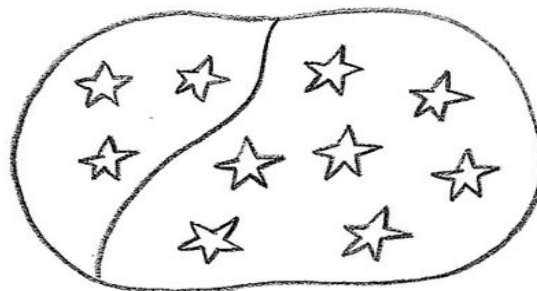


Парови броеви кој го прават бројот 10


Пресметај ги зборовите.




$$4 + 6 = \boxed{10}$$




$$3 + \underline{\quad} = \boxed{\quad}$$



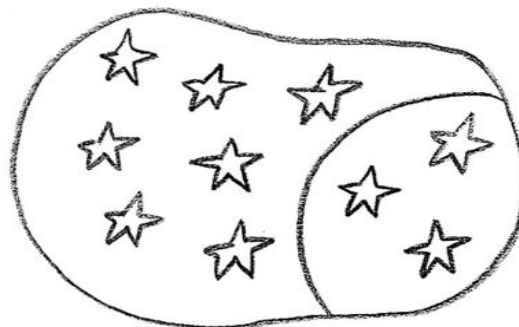
$$\underline{\quad} + \underline{\quad} = \boxed{\quad}$$



$$\underline{\quad} + \underline{\quad} = \boxed{\quad}$$



$$\underline{\quad} + \underline{\quad} = \boxed{\quad}$$



$$\underline{\quad} + \underline{\quad} = \boxed{\quad}$$