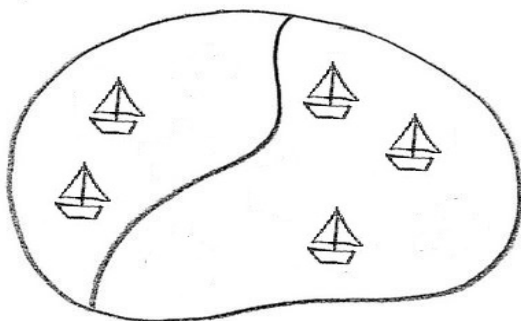


Име: _____

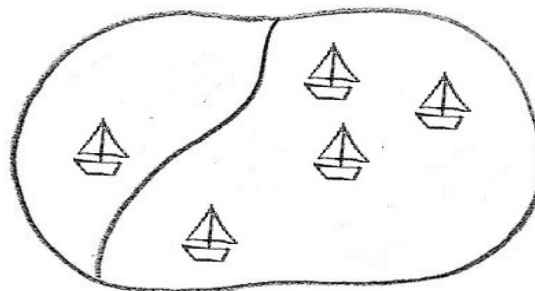


Парови броеви кој го прават бројот 5

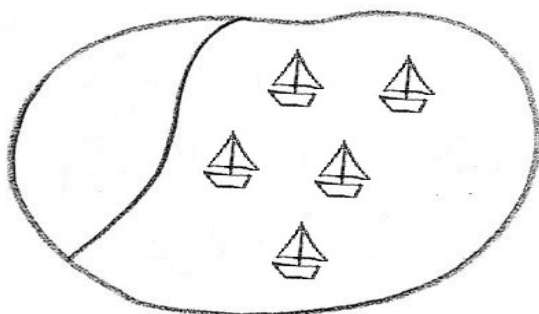
Пресметај ги зборовите.



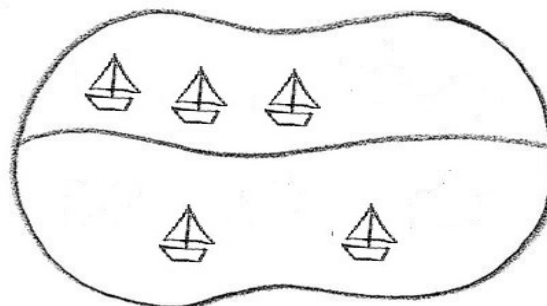
$$\underline{\quad} + \underline{\quad} = \square$$




$$\underline{\quad} + \underline{\quad} = \square$$



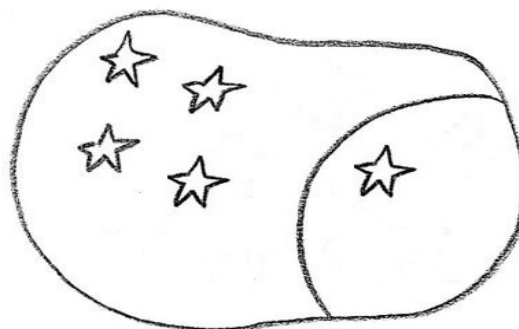
$$\underline{\quad} + \underline{\quad} = \square$$



$$\underline{\quad} + \underline{\quad} = \square$$



$$\underline{\quad} + \underline{\quad} = \square$$



$$\underline{\quad} + \underline{\quad} = \square$$