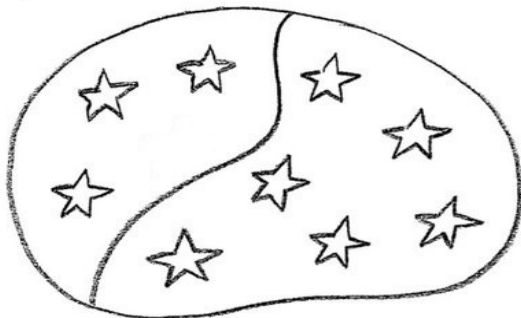


Име: _____

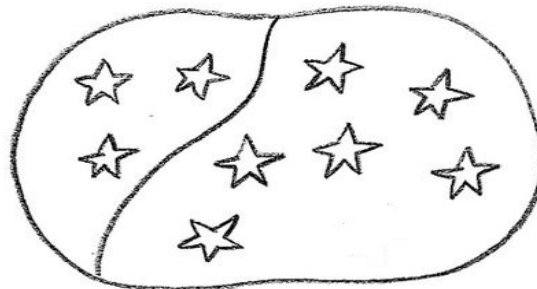


Парови броеви кој го прават бројот 9

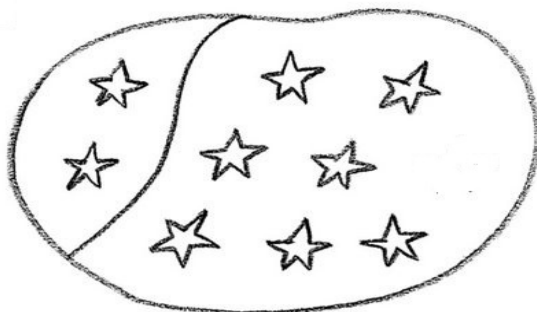
Пресметај ги зборовите.




$$+ \underline{6} = \square$$




$$3 + \underline{\quad} = \square$$



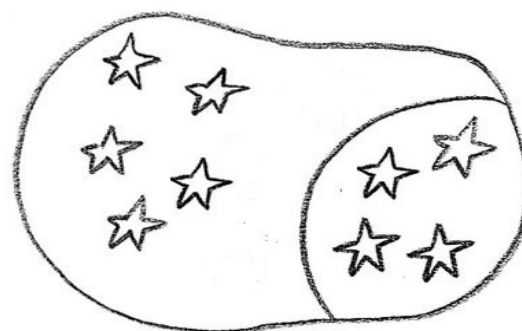
$$\underline{\quad} + \underline{\quad} = \square$$



$$\underline{\quad} + \underline{\quad} = \square$$



$$\underline{\quad} + \underline{\quad} = \square$$



$$\underline{\quad} + \underline{\quad} = \square$$