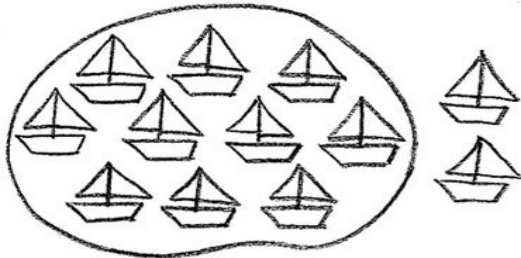


Име: \_\_\_\_\_




## Собирање до 20

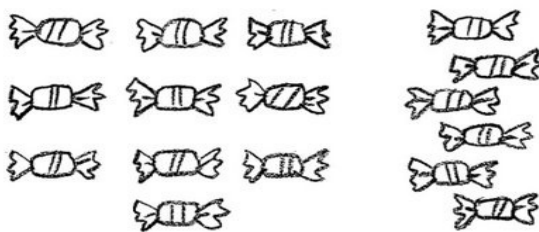
Пресметај ги зборовите.




$$10 + \underline{\quad} = \boxed{12}$$




$$10 + \underline{\quad} = \boxed{\quad}$$



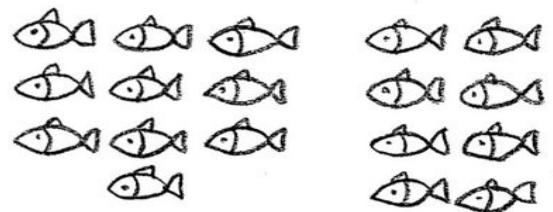
$$10 + \underline{\quad} = \boxed{\quad}$$



$$10 + \underline{\quad} = \boxed{\quad}$$



$$10 + \underline{\quad} = \boxed{\quad}$$



$$10 + \underline{\quad} = \boxed{\quad}$$

Пресметај напамет

Кој број ќе го добиеш ако го додадеш бројот 10 ?

1	4	6	3	10
7	8	2	5	9